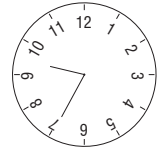



Wie spät ist es ?



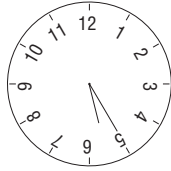
Bestimme die Uhrzeit - vormittags und nachmittags!

Die Uhr oben rechts zeigt v: 09:35 Uhr bzw. n: 21:35 Uhr



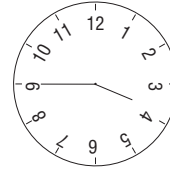
V: _____

n: _____



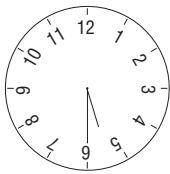
V: _____

n: _____



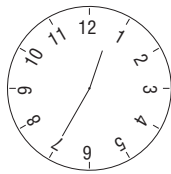
V: _____

n: _____




V: _____

n: _____



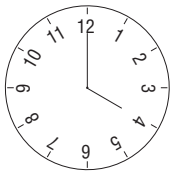
V: _____

n: _____




V: _____

n: _____




V: _____

n: _____




V: _____

n: _____




V: _____

n: _____



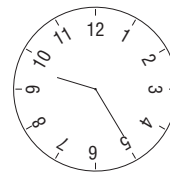
V: _____

n: _____




V: _____

n: _____



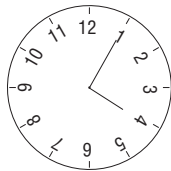
V: _____

n: _____




V: _____

n: _____




V: _____

n: _____




V: _____

n: _____




V: _____

n: _____



V: _____

n: _____



V: _____

n: _____